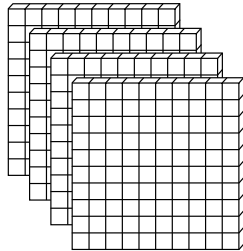


Hundreds

Write how many hundreds, tens, and ones.

1.

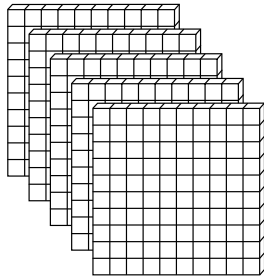


_____ hundreds

_____ tens

_____ ones

2.

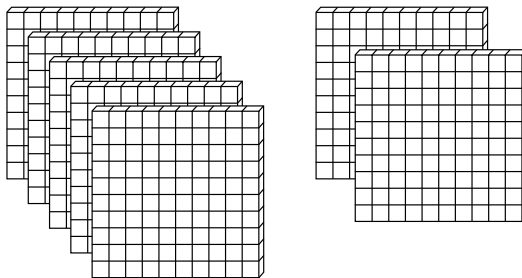


_____ hundreds

_____ tens

_____ ones

3.

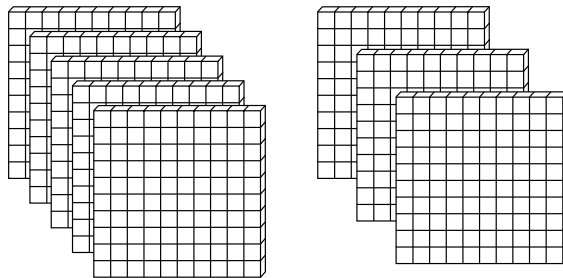


_____ hundreds

_____ tens

_____ ones

4.



_____ hundreds

_____ tens

_____ ones

Mixed Review

Solve.

5. $60 + 34 = \underline{\quad}$

$44 + 52 = \underline{\quad}$

$61 + 23 = \underline{\quad}$

6. $13 + 73 = \underline{\quad}$

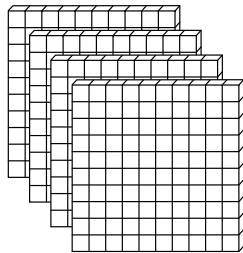
$40 + 18 = \underline{\quad}$

$25 + 31 = \underline{\quad}$

Hundreds

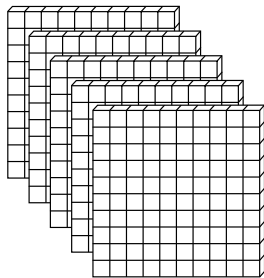
Write how many hundreds, tens, and ones.

1.



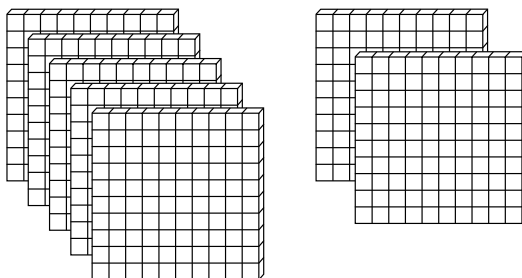
4 hundreds
40 tens
400 ones

2.



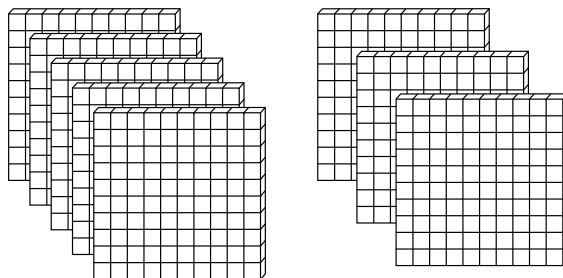
5 hundreds
50 tens
500 ones

3.



7 hundreds
70 tens
700 ones

4.



8 hundreds
80 tens
800 ones

Mixed Review

Solve.

$$5. 60 + 34 = \underline{94}$$

$$44 + 52 = \underline{96}$$

$$61 + 23 = \underline{84}$$

$$6. 13 + 73 = \underline{86}$$

$$40 + 18 = \underline{58}$$

$$25 + 31 = \underline{56}$$