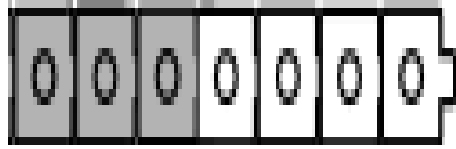


Complete each number sentence.

Picture A



$$\square + \square = 7$$

Picture B



$$5 = \square + \square$$

Picture C



$$5 = \square + \square$$

Picture D



$$\square + \square = 5$$

Draw a picture to represent the number sentences that are shown.  
Use linking cubes in your drawing.

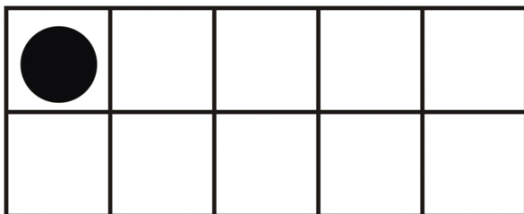
Picture E

$$9 = 6 + 3$$

Picture F


$$4 + 5 = 9$$

Picture G




$$\boxed{\phantom{0}} + \boxed{\phantom{0}} = 10$$

Picture H



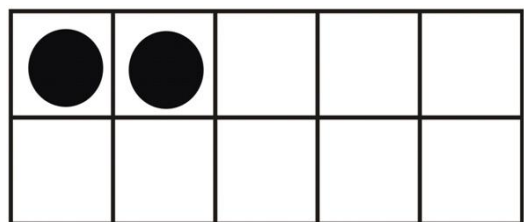
$$10 = \boxed{\phantom{0}} + \boxed{\phantom{0}}$$

Picture I



$$\boxed{\phantom{0}} + \boxed{\phantom{0}} = 10$$

Picture J



$$10 = \boxed{\phantom{0}} + \boxed{\phantom{0}}$$

Draw a picture to represent the number sentences that are shown.  
Use tens frames in your drawing.

Picture K

$$\boxed{7} + \boxed{1} = 8$$

Picture L

$$8 = \boxed{6} + \boxed{2}$$