



# Addition Story Problems

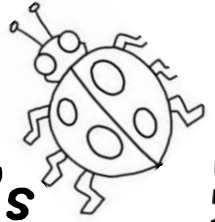
Fully aligned to the new  
Common Core standards

K.OA.1 & K.OA.2

standards labeled on each page

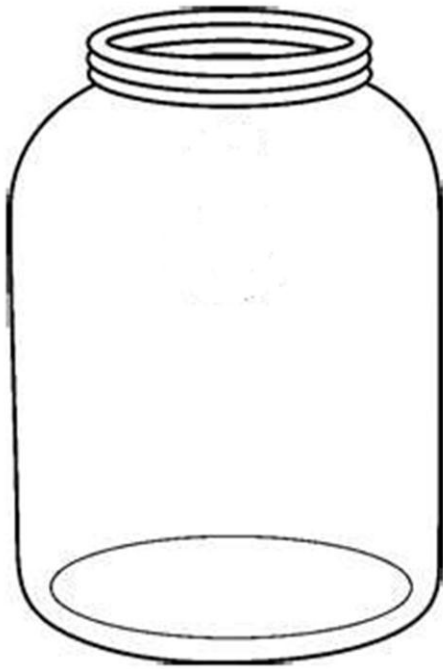
Name \_\_\_\_\_ Date \_\_\_\_\_

# Tad's Bug Jar



Tad put 5 ladybugs in his bug jar. Tad's sister put 3 more ladybugs in Tad's jar. How many bugs does Tad have in all?

My Picture:



My Tally/Graph Chart:

My Equation:

$$\underline{\quad} + \underline{\quad} = \underline{\quad}$$

My Answer:

\_\_\_\_\_ bugs

Name \_\_\_\_\_ Date \_\_\_\_\_

# Frosty's Buttons



Jack put 3 buttons on Frosty. Ben put 3 more buttons on Frosty. How many buttons are on Frosty in all?

My Picture:



My Tally/Graph Chart:

My Equation:

\_\_\_\_\_ + \_\_\_\_\_ = \_\_\_\_\_

My Answer:

\_\_\_\_\_ buttons


Name \_\_\_\_\_ Date \_\_\_\_\_

# Frog Splash




One sunny day 4 frogs jumped in the pond. Later that day 2 more frogs jumped into the pond. How many frogs are in the pond all together?

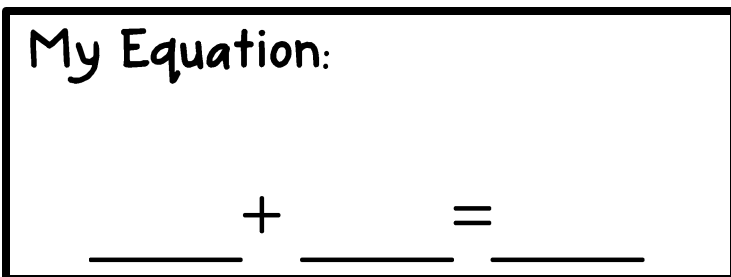
My Picture:



My Tally/Graph Chart:



My Equation:



My Answer:




Name \_\_\_\_\_ Date \_\_\_\_\_

# COUNTING CARS




Kim saw 3 red cars pass by her house. Kim saw 3 blue cars pass by her house. How many cars did Kim see all together?

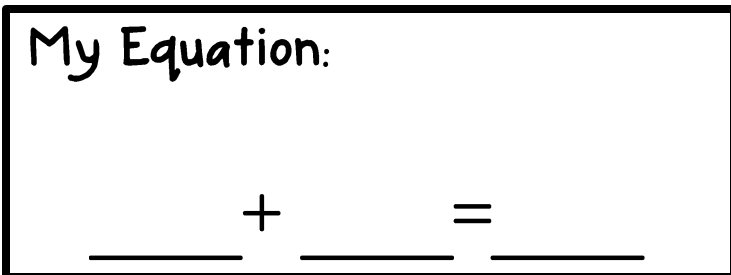
My Picture:



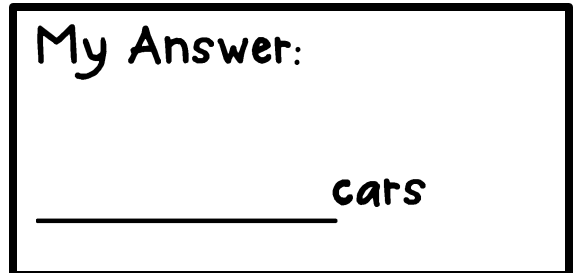
My Tally/Graph Chart:



My Equation:



My Answer:



Name \_\_\_\_\_ Date \_\_\_\_\_

# Lily Pad Addition



Directions: Use the frog picture cards to solve the addition problems.

1.  $4 + 3 =$  \_\_\_\_\_

2.  $6 + 3 =$  \_\_\_\_\_

3.  $4 + 1 =$  \_\_\_\_\_

4.  $6 + 4 =$  \_\_\_\_\_

5.  $2 + 3 =$  \_\_\_\_\_


6.  $2 + 0 =$  \_\_\_\_\_

7.  $6 + 1 =$  \_\_\_\_\_

8.  $7 + 2 =$  \_\_\_\_\_

9.  $5 + 5 =$  \_\_\_\_\_

10.  $9 + 1 =$  \_\_\_\_\_



Name \_\_\_\_\_ Date \_\_\_\_\_

# Diggin' For Bones



Directions: Use the bone picture cards to solve the addition problems.

1.  $4 + 3 =$  \_\_\_\_\_

2.  $6 + 3 =$  \_\_\_\_\_

3.  $4 + 1 =$  \_\_\_\_\_

4.  $6 + 4 =$  \_\_\_\_\_

5.  $2 + 3 =$  \_\_\_\_\_

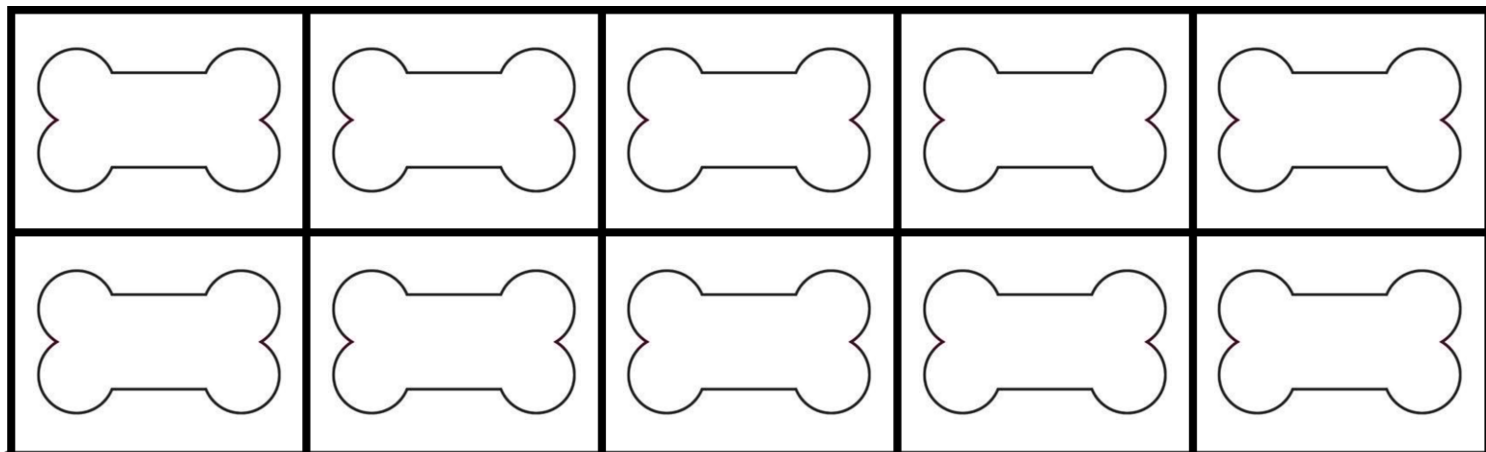
6.  $2 + 0 =$  \_\_\_\_\_

7.  $6 + 1 =$  \_\_\_\_\_

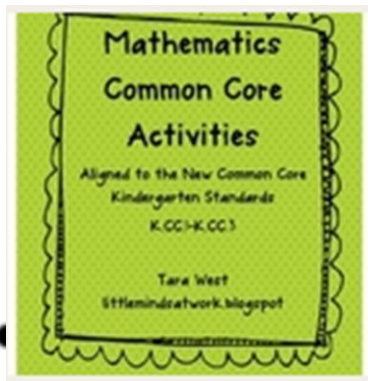
8.  $7 + 2 =$  \_\_\_\_\_

9.  $5 + 5 =$  \_\_\_\_\_

10.  $9 + 1 =$  \_\_\_\_\_



Check out these fabulous Common Core finds at my TpT Store!





THANKS FOR DOWNLOADING  
MY PRODUCT!

VISIT MY BLOG:

[www.littlemindsatwork.blogspot.com](http://www.littlemindsatwork.blogspot.com)



Graphics & Fonts:



Dotted Border for worksheets:  
free download from Tracee Oman TPT