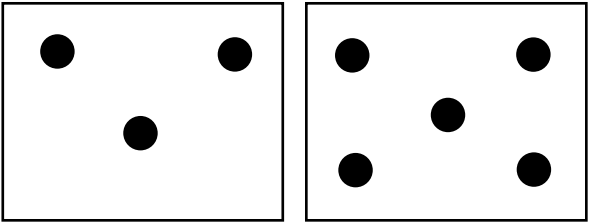



# Compare 0 Through 10

Circle the words that make the sentence true.

1.  2. 

3 is greater than 5  
 is less than

8 is greater than 7  
 is less than

3. 10 is greater than 5  
 is less than

4. 4 is greater than 9  
 is less than

 **Test Prep**

Fill in the  for the correct answer. NH means Not Here.

5. Which number is greater than 8?  
 6    7    9    NH

6. Which number is less than 4?  
 8    6    4    NH

Explain how you knew which number to fill in.



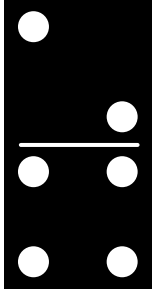
---



---

# Compare 0 Through 10

You can count to compare numbers.





2 is less than 4.

6 is greater than 4.

4 is equal to 4.



Circle the words that make the sentence true.

1.





3 is greater than 5  
3 is less than 5

2.



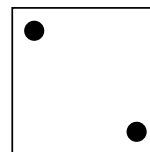

9 is greater than 5  
9 is less than 5

3.



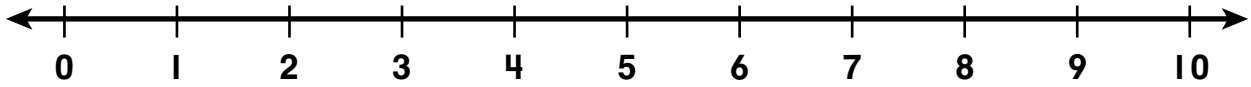
4 is equal to 4  
4 is less than 4

4.



7 is equal to 2  
7 is greater than 2


# Before and After



1. Color each  that has a number greater than 4.




2. Color each  that has a number greater than 5.



3. Color each  that has a number less than 7.



4. Color each  that has a number less than 8.



**Write About It** How can you use a number line to compare two numbers?





---



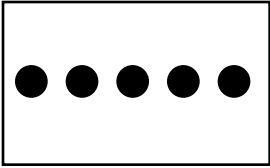

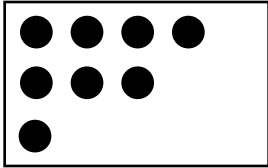

---

# Compare 0 Through 10

You can compare numbers using the words greater than and less than.

 	 
<p>10 is <u>greater than</u> 4.</p>	<p>6 is <u>less than</u> 10.</p>

Write greater than or less than to make the sentence true.

<p>1.  </p> <p>5 is <u>greater than</u> 3.</p>	<p>2.  </p> <p>8 is _____ 10.</p>
<p>3. 6 is _____ 9.</p>	<p>4. 7 is _____ 4.</p>

5. Write any numbers from 1 through 9 under My Number in the chart.

Then fill in the other columns.

A Number Less Than	My Number	A Number Greater Than