


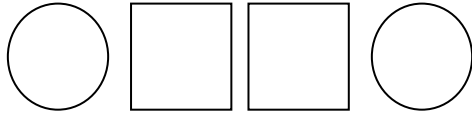
Name _____

Date _____

Math Rules and Patterns - Matching Worksheet

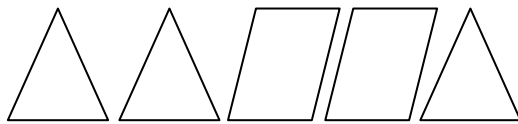
What comes next in each pattern?

1.



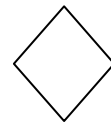
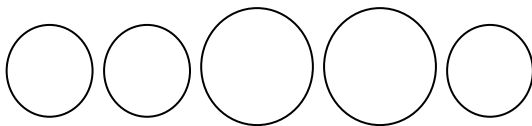
a.

2.



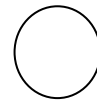
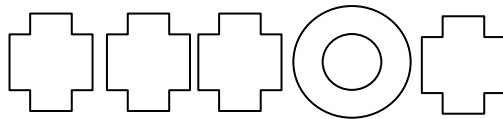
b.

3.



c.

4.



d.

5.



e.



Name _____

Date _____

Math Rules and Patterns - Independent Practice Worksheet

Write the missing numbers.

1. 2 , 4 , _____ , 10 , 12 , _____

2. 6 , 12 , _____ , 24 , _____ , _____ 42

3. 4 , _____ 12 , _____ , 20 , _____

4. _____ , 20 , 30 , _____ , _____ , 60

5. 12 , _____ , _____ , 48 , 60 , _____

6. 15 , 18 , _____ , _____ , _____ , 30

7. 56 , _____ , 70 , 77 , _____

8. 27 , _____ , 45 , 54 , _____ , _____

9. 26 , 39 , _____ , _____ , 78 , _____

10. _____ , 20 , 22 , _____

