
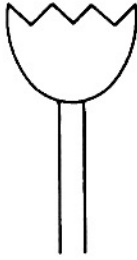
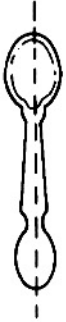


Name \_\_\_\_\_

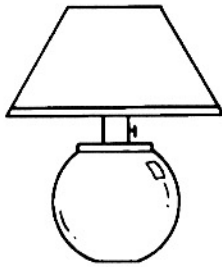
# Symmetry

Draw one line of symmetry for each shape.

1.

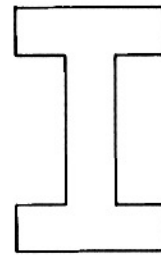
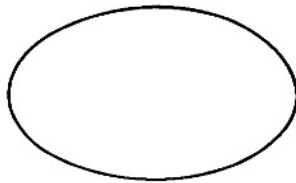
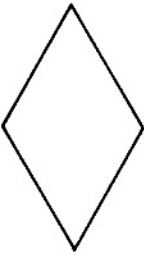


2.



Draw two lines of symmetry for each shape.


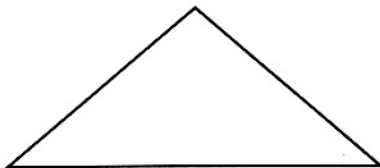
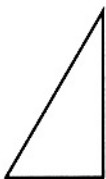
3.



---

## Visual Thinking

4. Ring the shape if it could be folded to make a line of symmetry.



# Symmetry

## Answer Key

---

- 1.–3. Check work.
4. Ring middle and last shapes.

