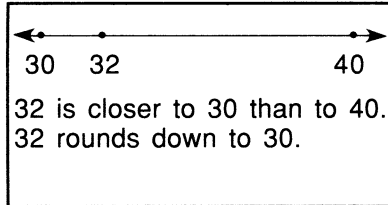


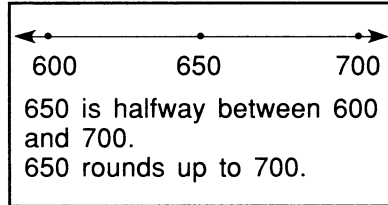
Rounding Whole Numbers

A rounded number tells you about how many. You can use a number line to help you round numbers. Remember, when a number is halfway or more to the right on a number line, always round the number up.

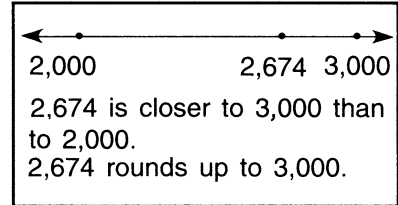
Round 32 to the nearest ten.



Round 650 to the nearest hundred.



Round 2,674 to the nearest thousand.



Round to the nearest ten.

- | | | | |
|-----------------|-----------|-----------|-----------|
| 1. 48 <u>50</u> | 73 _____ | 39 _____ | 25 _____ |
| 2. 37 _____ | 84 _____ | 95 _____ | 44 _____ |
| 3. 54 _____ | 62 _____ | 86 _____ | 99 _____ |
| 4. 361 _____ | 629 _____ | 750 _____ | 299 _____ |

Round to the nearest hundred.

- | | | | |
|-------------------|-----------|-----------|-----------|
| 5. 473 <u>500</u> | 865 _____ | 537 _____ | 119 _____ |
| 6. 892 _____ | 567 _____ | 228 _____ | 117 _____ |
| 7. 486 _____ | 349 _____ | 654 _____ | 732 _____ |
| 8. 539 _____ | 149 _____ | 683 _____ | 990 _____ |

Round to the nearest thousand.

- | | | | |
|--------------------------|--------------|--------------|--------------|
| 9. 3,547 <u>4,000</u> | 3,499 _____ | 7,305 _____ | 1,778 _____ |
| 10. 8,273 _____ | 5,687 _____ | 4,500 _____ | 7,820 _____ |
| 11. 9,672 _____ | 7,829 _____ | 2,230 _____ | 9,563 _____ |
| 12. 16,107 <u>16,000</u> | 11,023 _____ | 23,254 _____ | 67,901 _____ |
| 13. 19,205 _____ | 33,284 _____ | 54,645 _____ | 11,990 _____ |

Rounding Whole Numbers

Answer Key

- | | | | | |
|-----|--------|--------|--------|--------|
| 1. | 50 | 70 | 40 | 30 |
| 2. | 40 | 80 | 100 | 40 |
| 3. | 50 | 60 | 90 | 100 |
| 4. | 360 | 630 | 750 | 300 |
| 5. | 500 | 900 | 500 | 100 |
| 6. | 900 | 600 | 200 | 100 |
| 7. | 500 | 300 | 700 | 700 |
| 8. | 500 | 100 | 700 | 1,000 |
| 9. | 4,000 | 3,000 | 7,000 | 2,000 |
| 10. | 8,000 | 6,000 | 5,000 | 8,000 |
| 11. | 10,000 | 8,000 | 2,000 | 10,000 |
| 12. | 16,000 | 11,000 | 23,000 | 68,000 |
| 13. | 19,000 | 33,000 | 55,000 | 12,000 |

