
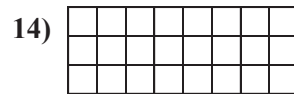
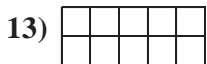
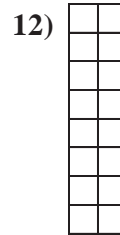
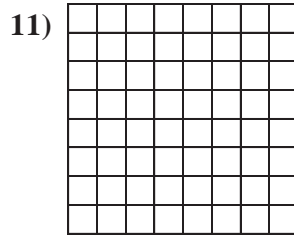
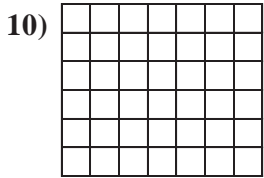
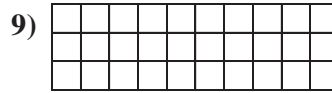

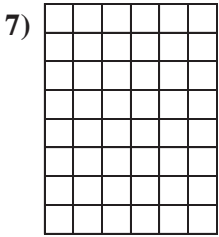
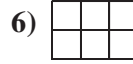

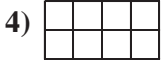







Determine the square units of the following problems. Each $\square = 1$ square unit (sq unit).


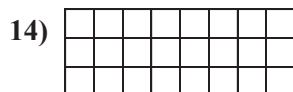
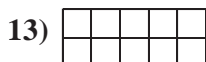
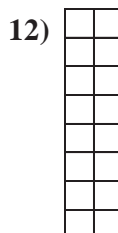
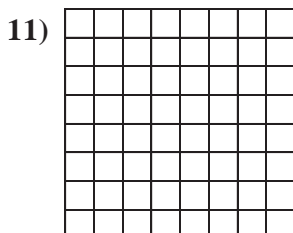
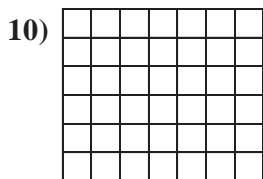
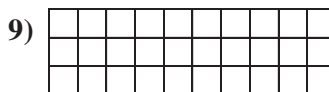
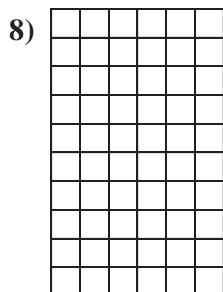
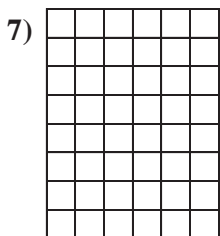
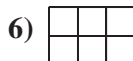

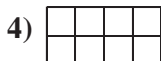





Answers

1. _____
2. _____
3. _____
4. _____
5. _____
6. _____
7. _____
8. _____
9. _____
10. _____
11. _____
12. _____
13. _____
14. _____
15. _____



Determine the square units of the following problems. Each $\square = 1$ square unit (sq unit).



Answers

1. **63 Sq Units**

2. **80 Sq Units**

3. **32 Sq Units**

4. **8 Sq Units**

5. **54 Sq Units**

6. **6 Sq Units**

7. **48 Sq Units**

8. **60 Sq Units**

9. **30 Sq Units**

10. **42 Sq Units**

11. **64 Sq Units**

12. **16 Sq Units**

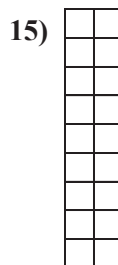
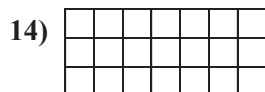
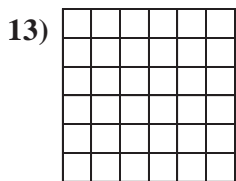
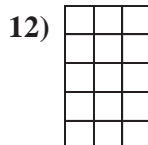

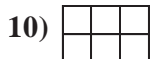
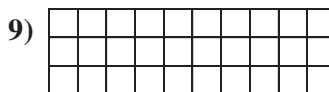

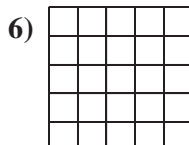

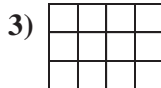

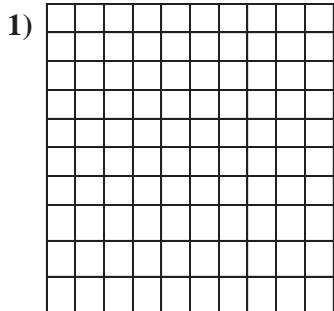
13. **10 Sq Units**

14. **24 Sq Units**

15. **30 Sq Units**



Determine the square units of the following problems. Each $\square = 1$ square unit (sq unit).

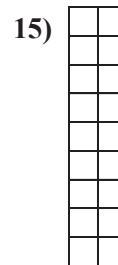
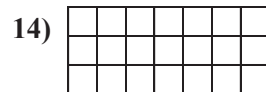
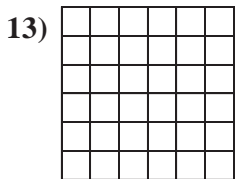
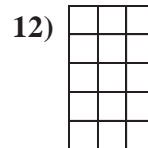

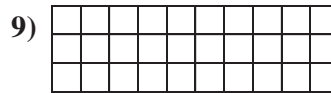

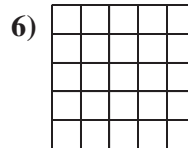
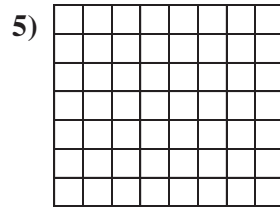

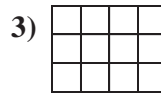

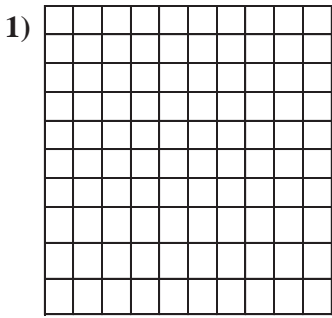


Answers

1. _____
2. _____
3. _____
4. _____
5. _____
6. _____
7. _____
8. _____
9. _____
10. _____
11. _____
12. _____
13. _____
14. _____
15. _____



Determine the square units of the following problems. Each $\square = 1$ square unit (sq unit).



Answers

1. **100 Sq Units**

2. **40 Sq Units**

3. **12 Sq Units**

4. **18 Sq Units**

5. **56 Sq Units**

6. **25 Sq Units**

7. **28 Sq Units**

8. **12 Sq Units**

9. **30 Sq Units**

10. **6 Sq Units**

11. **63 Sq Units**

12. **15 Sq Units**

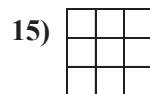

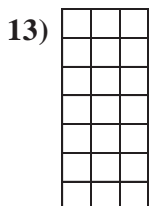
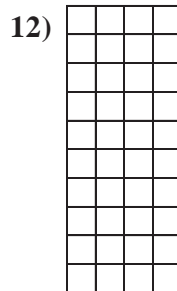
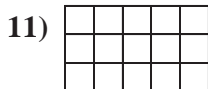
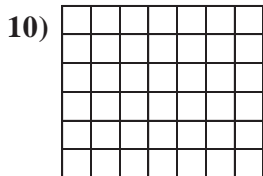
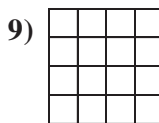
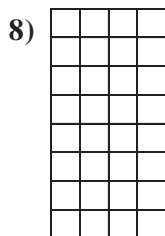
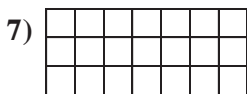
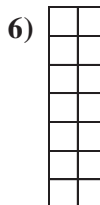
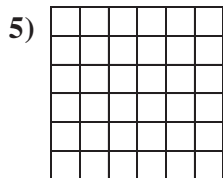

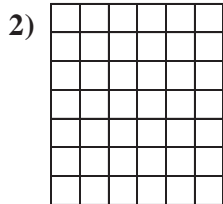

13. **36 Sq Units**

14. **21 Sq Units**

15. **18 Sq Units**



Determine the square units of the following problems. Each $\square = 1$ square unit (sq unit).

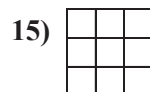

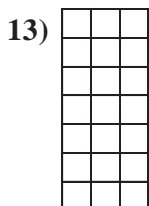
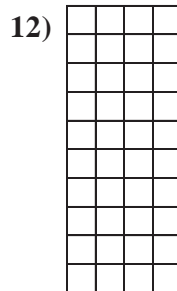
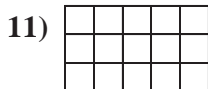
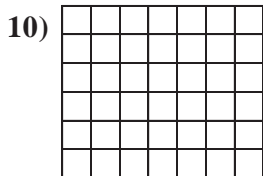
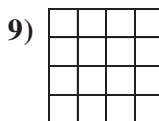
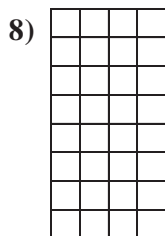
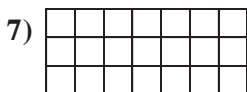
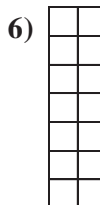
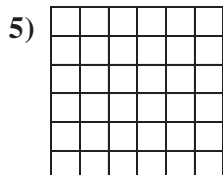

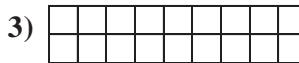
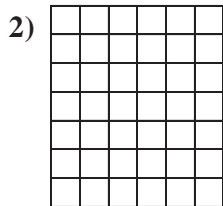



Answers

1. _____
2. _____
3. _____
4. _____
5. _____
6. _____
7. _____
8. _____
9. _____
10. _____
11. _____
12. _____
13. _____
14. _____
15. _____



Determine the square units of the following problems. Each $\square = 1$ square unit (sq unit).



Answers

1. **63 Sq Units**

2. **42 Sq Units**

3. **18 Sq Units**

4. **60 Sq Units**

5. **36 Sq Units**

6. **14 Sq Units**

7. **21 Sq Units**

8. **32 Sq Units**

9. **16 Sq Units**

10. **42 Sq Units**

11. **15 Sq Units**

12. **40 Sq Units**


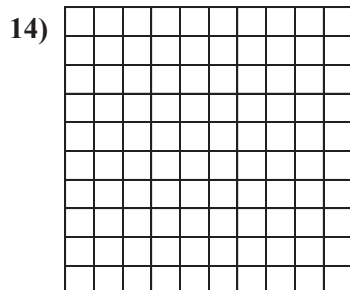
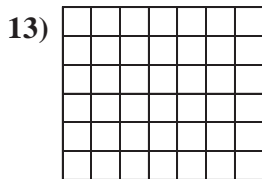
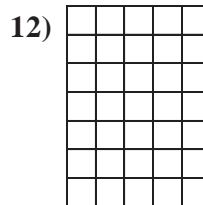




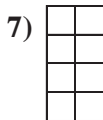

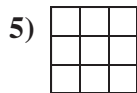
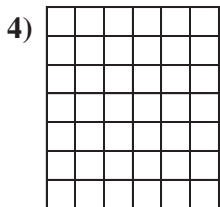



13. **21 Sq Units**

14. **56 Sq Units**

15. **9 Sq Units**



Determine the square units of the following problems. Each $\square = 1$ square unit (sq unit).


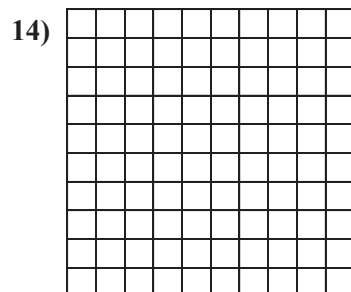
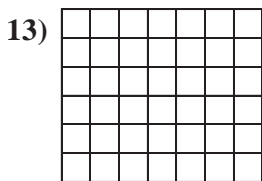
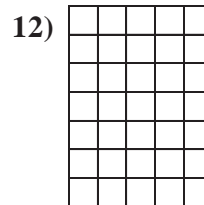




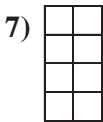

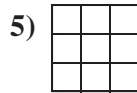
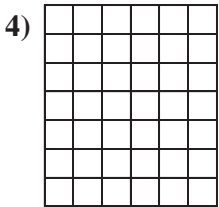





Answers

1. _____
2. _____
3. _____
4. _____
5. _____
6. _____
7. _____
8. _____
9. _____
10. _____
11. _____
12. _____
13. _____
14. _____
15. _____



Determine the square units of the following problems. Each $\square = 1$ square unit (sq unit).



Answers

1. **40 Sq Units**

2. **80 Sq Units**

3. **14 Sq Units**

4. **42 Sq Units**

5. **9 Sq Units**

6. **63 Sq Units**

7. **8 Sq Units**

8. **48 Sq Units**

9. **63 Sq Units**

10. **30 Sq Units**

11. **45 Sq Units**

12. **35 Sq Units**

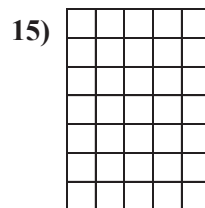
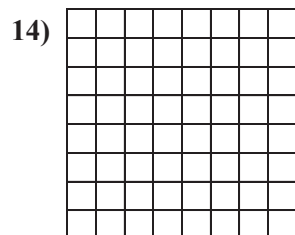
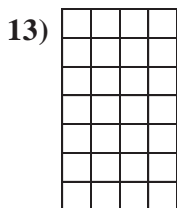
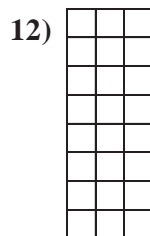

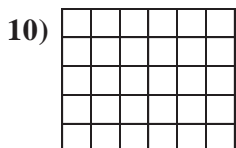
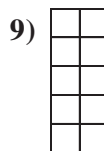
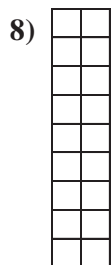
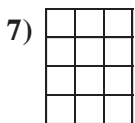
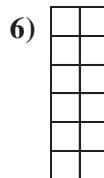




13. **42 Sq Units**

14. **100 Sq Units**

15. **24 Sq Units**



Determine the square units of the following problems. Each $\square = 1$ square unit (sq unit).

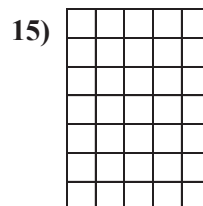
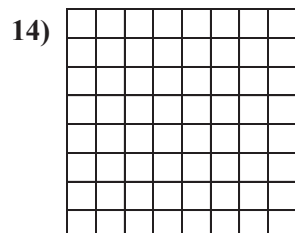
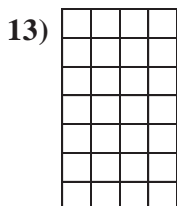
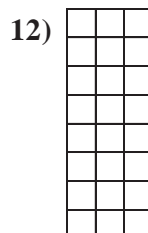

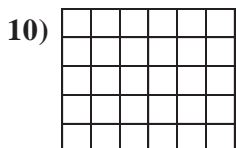
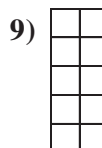
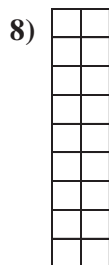
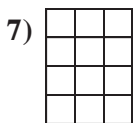
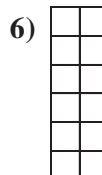






Answers

1. _____
2. _____
3. _____
4. _____
5. _____
6. _____
7. _____
8. _____
9. _____
10. _____
11. _____
12. _____
13. _____
14. _____
15. _____



Determine the square units of the following problems. Each $\square = 1$ square unit (sq unit).



Answers

1. **35 Sq Units**

2. **60 Sq Units**

3. **12 Sq Units**

4. **49 Sq Units**

5. **48 Sq Units**

6. **12 Sq Units**

7. **12 Sq Units**

8. **18 Sq Units**

9. **10 Sq Units**

10. **30 Sq Units**

11. **54 Sq Units**

12. **24 Sq Units**






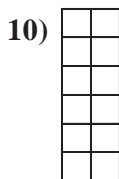
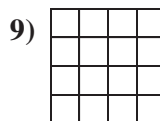
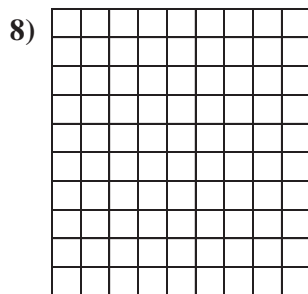
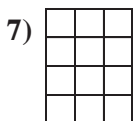

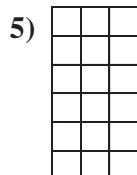

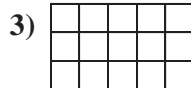
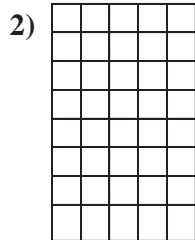
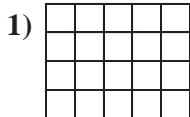
13. **28 Sq Units**

14. **64 Sq Units**

15. **35 Sq Units**



Determine the square units of the following problems. Each $\square = 1$ square unit (sq unit).



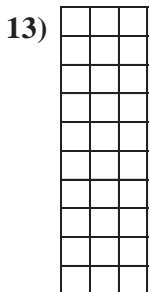


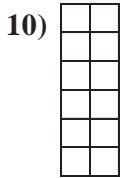
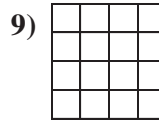
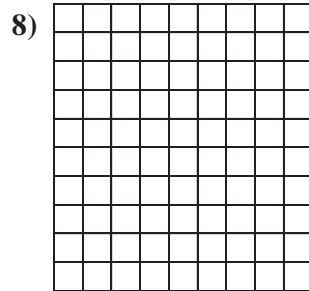
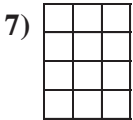
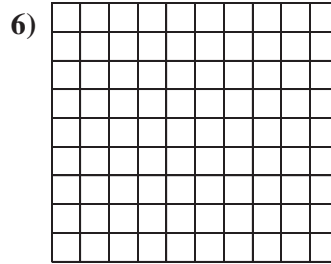
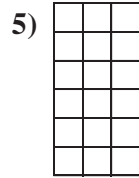
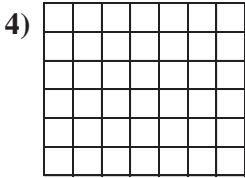
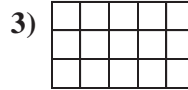
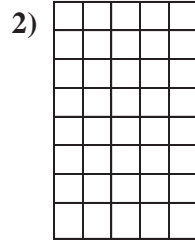
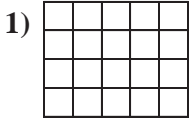


Answers

1. _____
2. _____
3. _____
4. _____
5. _____
6. _____
7. _____
8. _____
9. _____
10. _____
11. _____
12. _____
13. _____
14. _____
15. _____



Determine the square units of the following problems. Each $\square = 1$ square unit (sq unit).

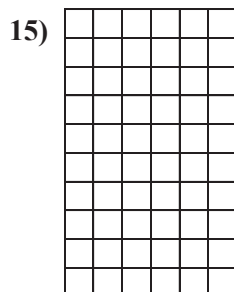
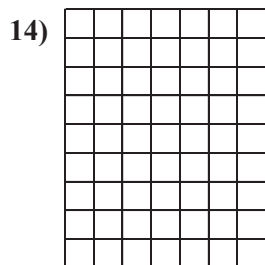
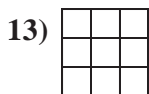
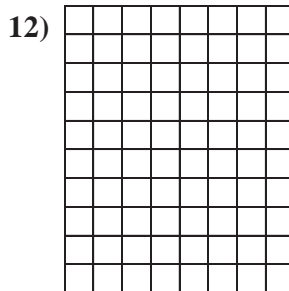
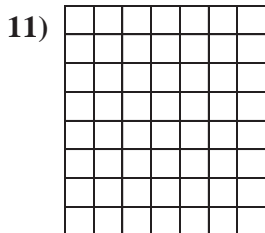

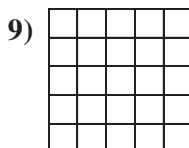
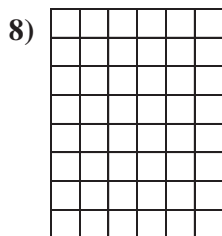



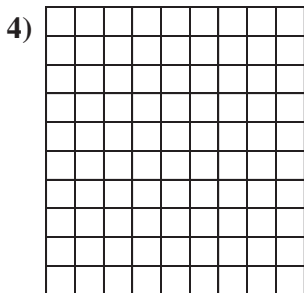
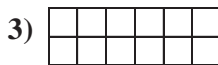
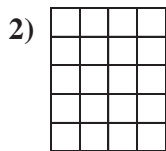



Answers

1. **20 Sq Units**
2. **40 Sq Units**
3. **15 Sq Units**
4. **42 Sq Units**
5. **18 Sq Units**
6. **90 Sq Units**
7. **12 Sq Units**
8. **90 Sq Units**
9. **16 Sq Units**
10. **12 Sq Units**
11. **40 Sq Units**
12. **70 Sq Units**
13. **30 Sq Units**
14. **70 Sq Units**
15. **48 Sq Units**



Determine the square units of the following problems. Each $\square = 1$ square unit (sq unit).

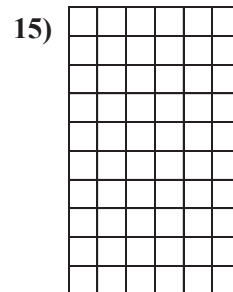
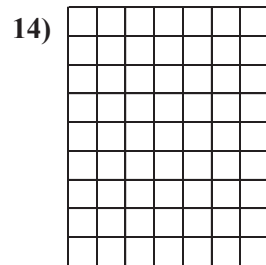
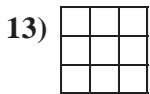
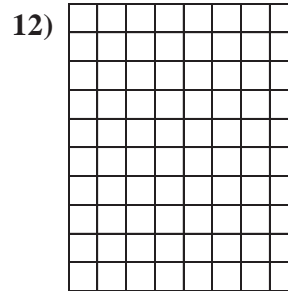
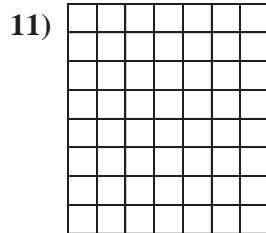

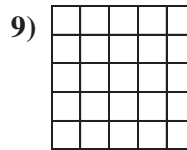
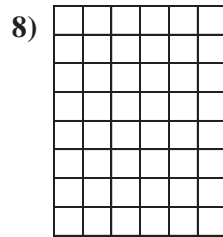

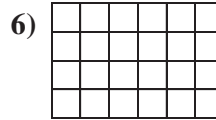
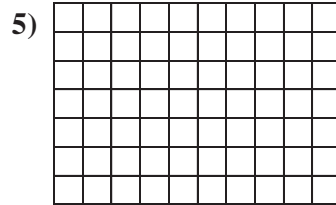
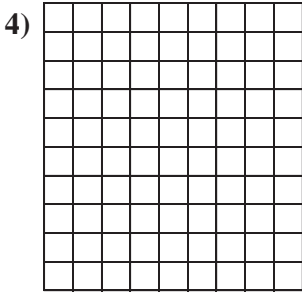
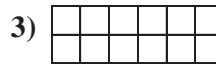
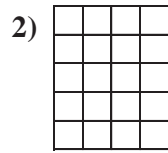



Answers

1. _____
2. _____
3. _____
4. _____
5. _____
6. _____
7. _____
8. _____
9. _____
10. _____
11. _____
12. _____
13. _____
14. _____
15. _____



Determine the square units of the following problems. Each $\square = 1$ square unit (sq unit).



Answers

1. **90 Sq Units**

2. **20 Sq Units**

3. **12 Sq Units**

4. **90 Sq Units**

5. **70 Sq Units**

6. **24 Sq Units**

7. **45 Sq Units**

8. **48 Sq Units**

9. **25 Sq Units**

10. **48 Sq Units**

11. **56 Sq Units**

12. **80 Sq Units**


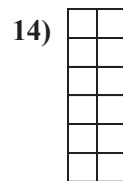
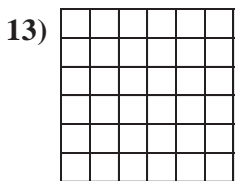
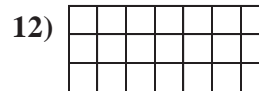
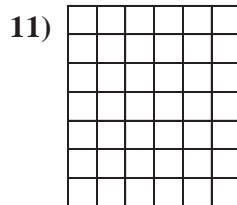


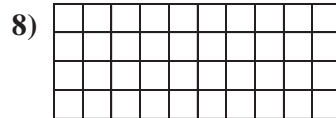

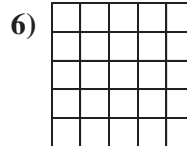

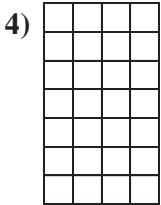
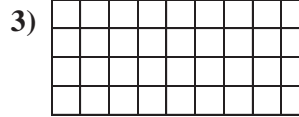
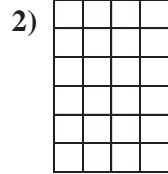
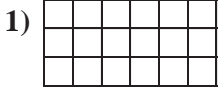
13. **9 Sq Units**

14. **63 Sq Units**

15. **60 Sq Units**



Determine the square units of the following problems. Each $\square = 1$ square unit (sq unit).


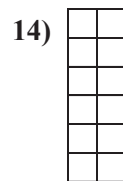
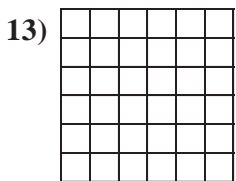
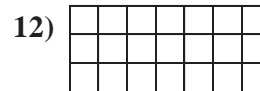
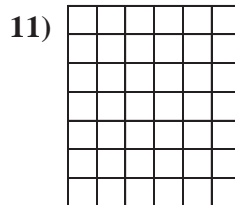


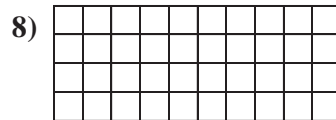

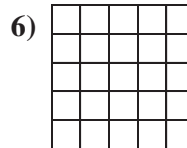

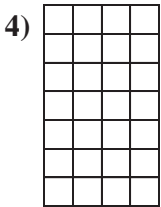
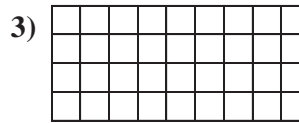
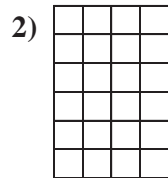
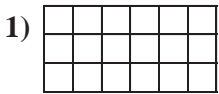


Answers

- 1. _____
- 2. _____
- 3. _____
- 4. _____
- 5. _____
- 6. _____
- 7. _____
- 8. _____
- 9. _____
- 10. _____
- 11. _____
- 12. _____
- 13. _____
- 14. _____
- 15. _____



Determine the square units of the following problems. Each $\square = 1$ square unit (sq unit).



Answers

1. **18 Sq Units**

2. **24 Sq Units**

3. **36 Sq Units**

4. **28 Sq Units**

5. **50 Sq Units**

6. **25 Sq Units**

7. **56 Sq Units**

8. **40 Sq Units**

9. **60 Sq Units**

10. **36 Sq Units**

11. **42 Sq Units**

12. **21 Sq Units**

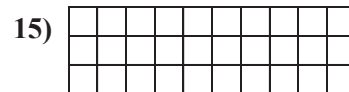
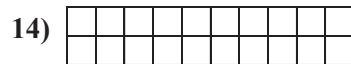

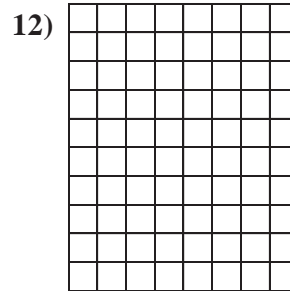
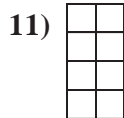



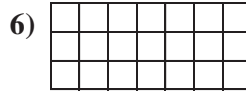

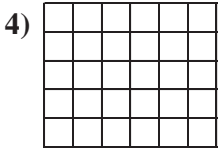
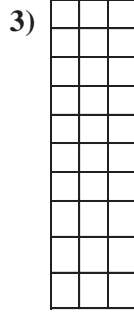


13. **36 Sq Units**

14. **12 Sq Units**

15. **32 Sq Units**



Determine the square units of the following problems. Each $\square = 1$ square unit (sq unit).

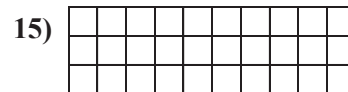

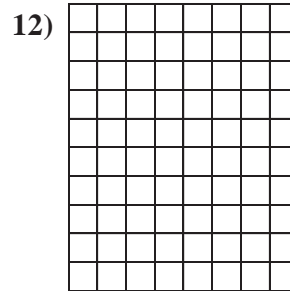
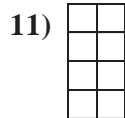




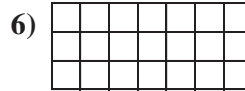
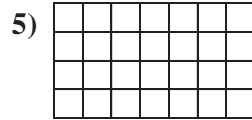
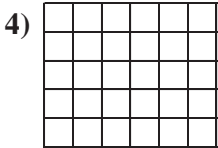
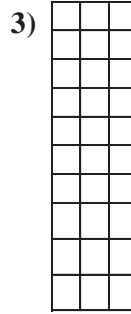
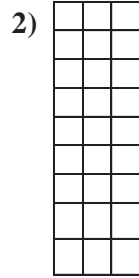



Answers

1. _____
2. _____
3. _____
4. _____
5. _____
6. _____
7. _____
8. _____
9. _____
10. _____
11. _____
12. _____
13. _____
14. _____
15. _____



Determine the square units of the following problems. Each $\square = 1$ square unit (sq unit).



Answers

1. **63 Sq Units**

2. **27 Sq Units**

3. **30 Sq Units**

4. **30 Sq Units**

5. **28 Sq Units**

6. **21 Sq Units**

7. **18 Sq Units**

8. **72 Sq Units**

9. **10 Sq Units**

10. **36 Sq Units**

11. **8 Sq Units**

12. **80 Sq Units**

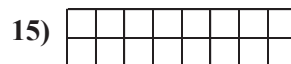
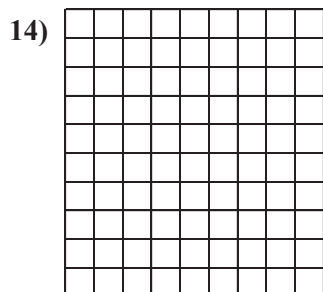
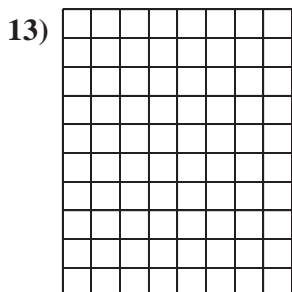
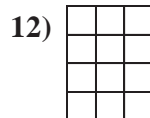
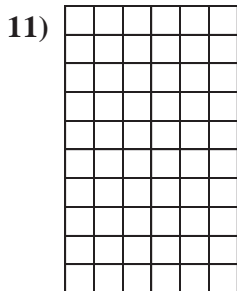
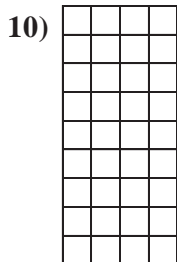
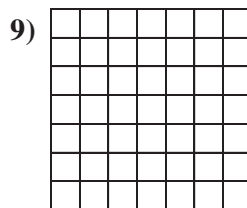
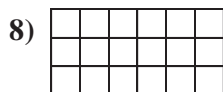
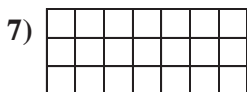
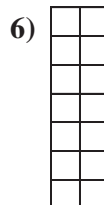
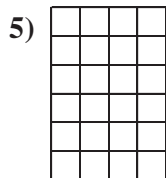



13. **45 Sq Units**

14. **20 Sq Units**

15. **30 Sq Units**



Determine the square units of the following problems. Each $\square = 1$ square unit (sq unit).

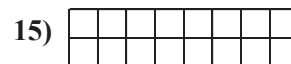
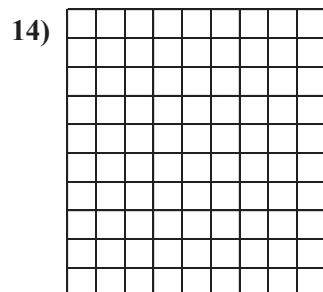
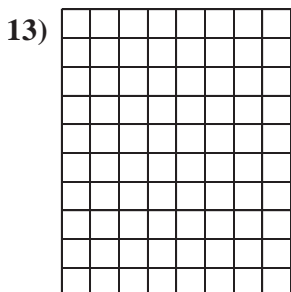
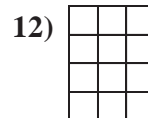
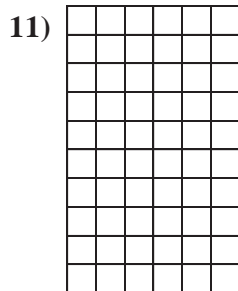
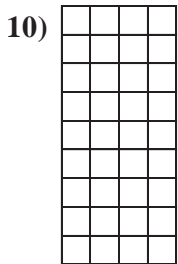
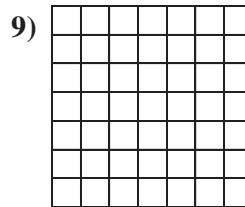
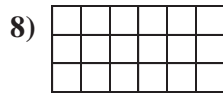
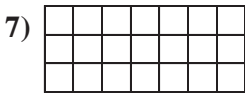
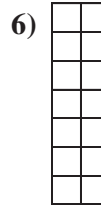
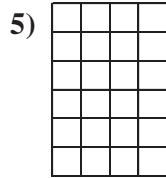






Answers

1. _____
2. _____
3. _____
4. _____
5. _____
6. _____
7. _____
8. _____
9. _____
10. _____
11. _____
12. _____
13. _____
14. _____
15. _____



Determine the square units of the following problems. Each $\square = 1$ square unit (sq unit).



Answers

1. **50 Sq Units**

2. **36 Sq Units**

3. **14 Sq Units**

4. **56 Sq Units**

5. **24 Sq Units**

6. **14 Sq Units**

7. **21 Sq Units**

8. **18 Sq Units**

9. **49 Sq Units**

10. **36 Sq Units**

11. **60 Sq Units**

12. **12 Sq Units**

13. **80 Sq Units**

14. **90 Sq Units**

15. **16 Sq Units**