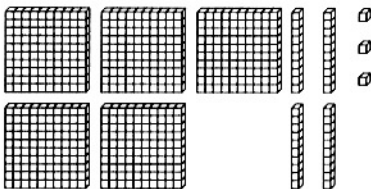


Name _____

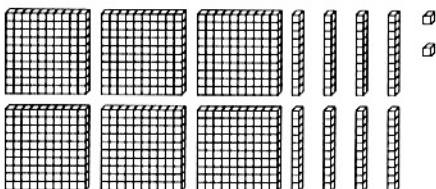
Writing Numbers to 999

Look at the models.
Write how many in the chart.
Then write the number.

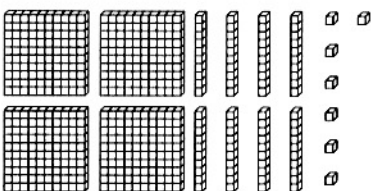
1. 

hundreds	tens	ones
5	4	3

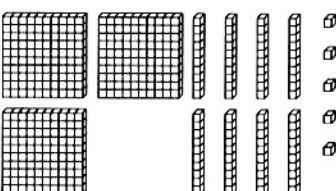
543

2. 

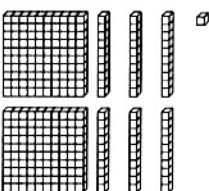
hundreds	tens	ones

3. 

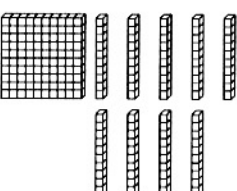
hundreds	tens	ones

4. 

hundreds	tens	ones

5. 

hundreds	tens	ones

6. 

hundreds	tens	ones

Number Sense

7. Write the number that is 10 greater than 173.

8. Write the number that is 100 greater than 731.

Writing Numbers to 999

Answer Key

1. 5, 4, 3; 543
2. 6, 8, 2; 682
3. 4, 8, 7; 487
4. 3, 8, 5; 385
5. 2, 6, 1; 261
6. 1, 9, 0; 190
7. 183
8. 831

