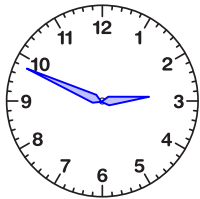


Reading the Time

Name: _____ Date: _____

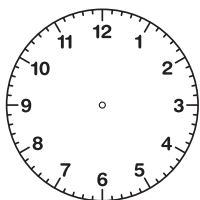
Draw the hands of each clock to show the correct time.

(1)



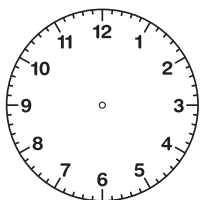
The time is 2:49.

(2)



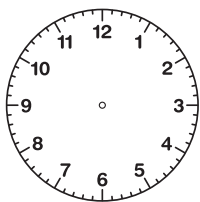
The time is 4:17.

(3)



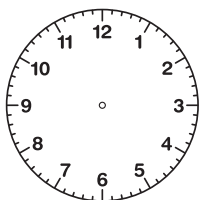
The time is 9:55.

(4)



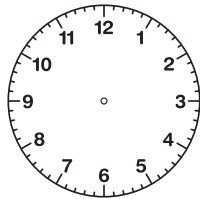
The time is 12:33.

(5)



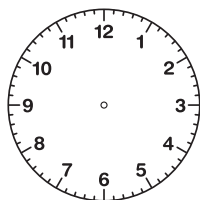
The time is 4:27.

(6)



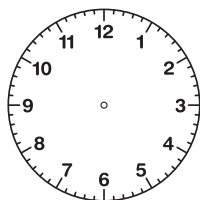
The time is 5:40.

(7)



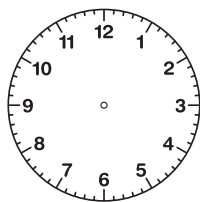
The time is 5:17.

(8)



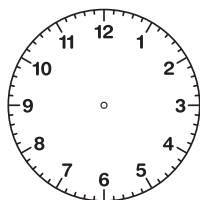
The time is 4:57.

(9)



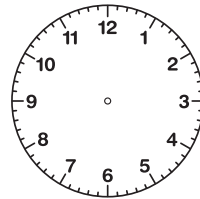
The time is 2:44.

(10)



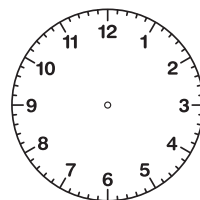
The time is 11:26.

(11)



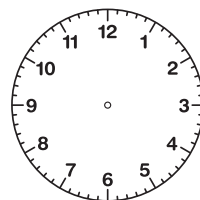
The time is 10:15.

(12)



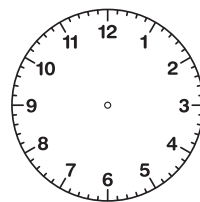
The time is 9:58.

(13)



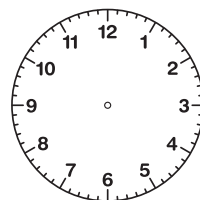
The time is 11:53.

(14)



The time is 10:28.

(15)



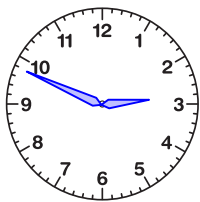
The time is 2:11.

Reading the Time

ANSWER KEY

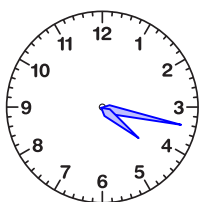
Draw the hands of each clock to show the correct time.

(1)



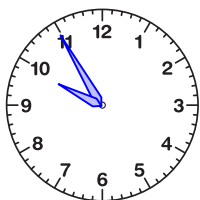
The time is 2:49.

(2)



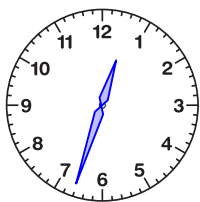
The time is 4:17.

(3)



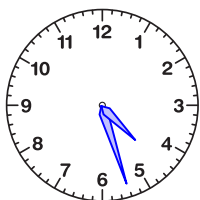
The time is 9:55.

(4)



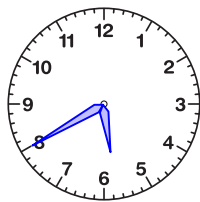
The time is 12:33.

(5)



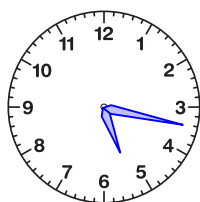
The time is 4:27.

(6)



The time is 5:40.

(7)



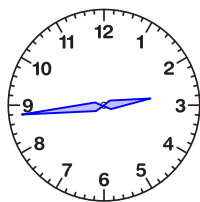
The time is 5:17.

(8)



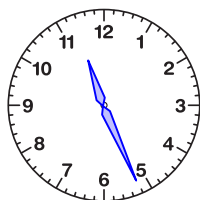
The time is 4:57.

(9)



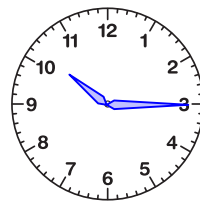
The time is 2:44.

(10)



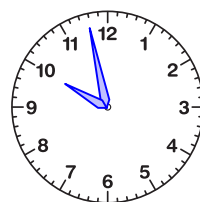
The time is 11:26.

(11)



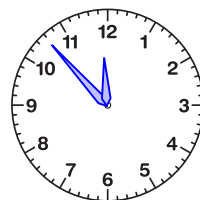
The time is 10:15.

(12)



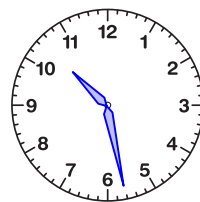
The time is 9:58.

(13)



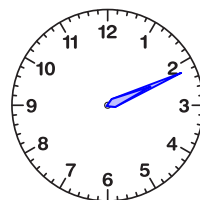
The time is 11:53.

(14)



The time is 10:28.

(15)



The time is 2:11.