


Reading the Time

Name: _____ Date: _____

Write the time that each clock is displaying.

(1)



The time is 8:40 .

(2)



The time is _____ .

(3)



The time is _____ .

(4)




The time is _____ .

(5)



The time is _____ .

(6)



The time is _____ .

(7)




The time is _____ .

(8)




The time is _____ .

(9)



The time is _____ .

(10)



The time is _____ .

(11)



The time is _____ .

(12)



The time is _____ .

(13)



The time is _____ .

(14)



The time is _____ .

(15)




The time is _____ .

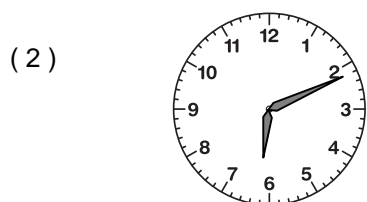
Reading the Time

ANSWER KEY

Write the time that each clock is displaying.



The time is 8:40.




The time is 6:11.



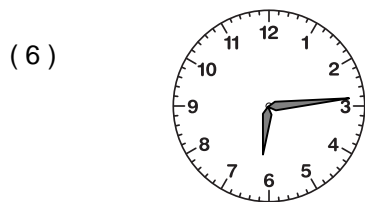
The time is 5:27.




The time is 10:43.




The time is 7:01.



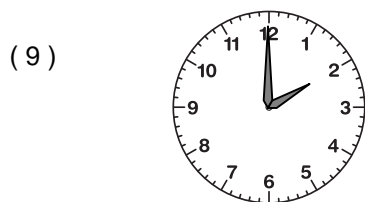
The time is 6:14.



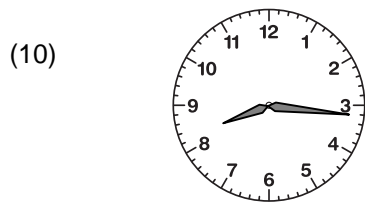
The time is 10:17.




The time is 1:12.



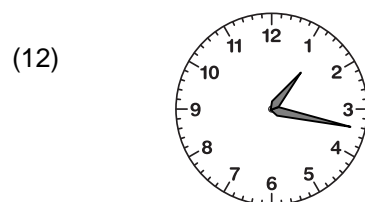
The time is 2:00.




The time is 8:16.




The time is 6:56.




The time is 1:17.



The time is 11:31.



The time is 12:33.



The time is 11:38.