

Name _____

Complete the chart by breaking the shape into equal pieces.

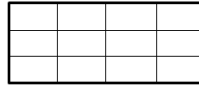
Rows	Columns	Shape	Total Pieces
------	---------	-------	--------------

3

4



SAMPLE



12


4

2



2

2




2

3




3

2



3

3




4

3




3

3



2

4



4

2

