


Reading the Time

Name: _____ Date: _____


Write the time that each clock is displaying.

(1)



The time is 5:00 .

(2)




The time is _____ .

(3)



The time is _____ .

(4)



The time is _____ .

(5)




The time is _____ .

(6)



The time is _____ .

(7)




The time is _____ .

(8)



The time is _____ .

(9)




The time is _____ .

(10)




The time is _____ .

(11)




The time is _____ .

(12)




The time is _____ .

(13)




The time is _____ .

(14)



The time is _____ .

(15)




The time is _____ .


Reading the Time

ANSWER KEY

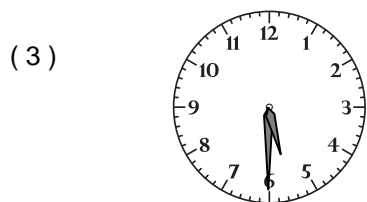
Write the time that each clock is displaying.




The time is 5:00.




The time is 8:30.




The time is 5:30.




The time is 3:00.




The time is 12:00.




The time is 10:30.




The time is 11:30.




The time is 8:00.




The time is 1:30.




The time is 7:00.




The time is 9:30.




The time is 11:00.



The time is 10:00.



The time is 6:00.



The time is 9:00.